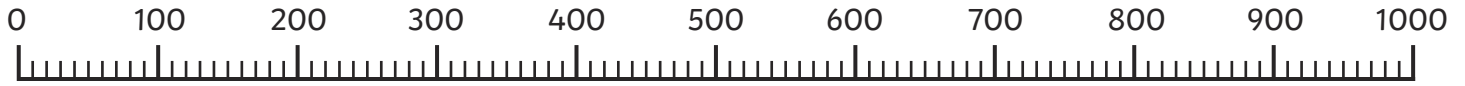








Comparing and Ordering Whole Numbers up to 1000

I can compare and order whole numbers up to 1000.



The pupils in Class 3 at Monster High need to line up in height order for their class photo. Draw an arrow on the number line and write their names underneath to put them in the correct order.







					
Warp 110cm	Grin 93cm	Ooze 324cm	Croc 284cm	Blob 403cm	Bugz 700cm

Complete the statements by writing < or > in each box.

93cm 110cm 284cm 324cm 700cm 403cm

284cm 110cm 403cm 700cm 284cm 403cm

Next, it's Class 4's turn for their photo so they need to line up in height order too. Draw an arrow on the number line and write their names underneath to put them in the correct order.

					
Clawz 210cm	Metallic 284cm	Dwarf 938cm	Goofs 485cm	Oafy 550cm	Tickles 704cm







Complete the statements by writing < or > in each box.

938cm 485cm 210cm 550cm 284cm 210cm

704cm 938cm 210cm 284cm 485cm 704cm

Comparing and Ordering Whole Numbers up to 1000 Answers

The pupils in Class 3 at Monster High need to line up in height order for their class photo. Draw an arrow on the number line and write their names underneath to put them in the correct order.







					
93cm	110cm	284cm	324cm	403cm	700cm

Complete the statements by writing < or > in each box.

93cm 110cm 284cm 324cm 700cm 403cm

284cm 110cm 403cm 700cm 284cm 403cm

Next, it's Class 4's turn for their photo so they need to line up in height order too. Draw an arrow on the number line and write their names underneath to put them in the correct order.

					
210cm	284cm	485cm	550cm	704cm	938cm

Complete the statements by writing < or > in each box.







938cm 485cm 210cm 550cm 284cm 210cm

704cm 938cm 210cm 284cm 485cm 704cm

Comparing and Ordering Whole Numbers up to 1000

I can compare and order whole numbers up to 1000.

The pupils in Class 3 at Monster High are all different heights. Draw a number line then draw an arrow with each monster's name on it to show how tall they are.







					
Warp 345cm	Grin 93cm	Ooze 349cm	Croc 284cm	Blob 852cm	Bugz 827cm

Complete the statements by writing $<$ or $>$ in each box.

93cm 827cm 827cm 852cm 349cm 284cm

284cm 93cm 582cm 852cm 345cm 349cm

Class 4 at Monster High have measured themselves too! Draw arrows and label them with the monster's names to show how tall they each are.

					
Clawz 204cm	Metallic 78cm	Dwarfy 240cm	Goofs 550cm	Oafy 505cm	Tickles 551cm


Complete the statements by writing < or > in each box.

78cm 204cm 204cm 240cm 204cm 78cm

550cm 505cm 550cm 551cm 505cm 551cm

Comparing and Ordering Whole Numbers up to 1000 Answers

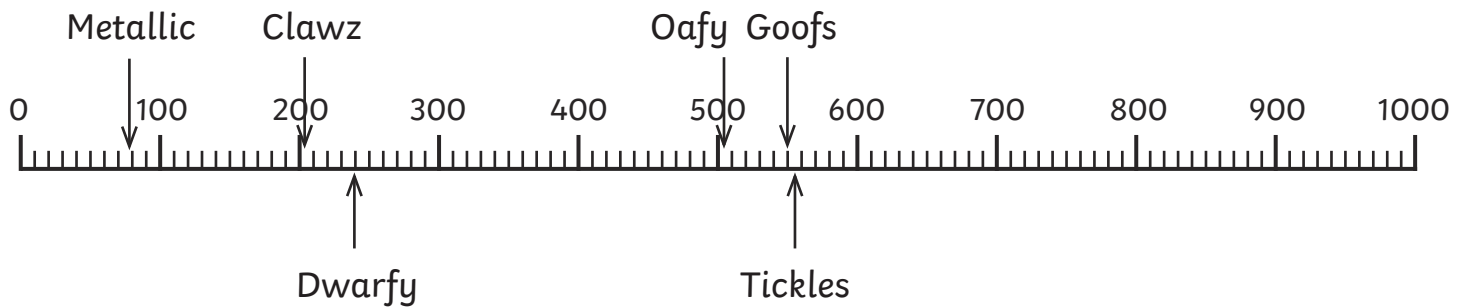
The pupils in Class 3 at Monster High are all different heights. Draw a number line then draw an arrow with each monster's name on it to show how tall they are.



Complete the statements by writing $<$ or $>$ in each box.

93cm 827cm 827cm 852cm 349cm 284cm

284cm 93cm 582cm 852cm 345cm 349cm



Complete the statements by writing $<$ or $>$ in each box.







78cm 204cm 204cm 240cm 204cm 78cm

550cm 505cm 550cm 551cm 505cm 551cm

Comparing and Ordering Whole Numbers up to 1000

I can compare and order whole numbers up to 1000.

The pupils in Class 3 at Monster High are all different heights.

<input type="text"/>	<input type="text"/>	<input type="text"/>	<input type="text"/>	<input type="text"/>	<input type="text"/>
					
538cm	5.23m	153cm	1.03m	493cm	6m

Complete the statements by writing < or > in each box.

1.03m 6m 538cm 6m 5.23m 493cm

538cm 1.53cm 358cm 1.53cm 1.03m 523cm

Use the clues to write the correct name of each monster in the boxes above. Think about which clues are most useful starting points.

- Blob is taller than Ooze.
- Grin's height is the same as 523cm.
- Bugz is the tallest.
- Croc is the shortest.
- Ooze's height has a 5 in the tens column.
- Warp is exactly 62cm shorter than Bugz.

Comparing and Ordering Whole Numbers up to 1000 Answers

I can compare and order whole numbers up to 1000.

Complete the statements by writing < or > in each box.

1.03m 6m 538cm 6m 5.23m 493cm

358cm 1.53cm 538cm 1.53cm 1.03m 523cm

Monster	Height
Warp	538cm
Grin	5.23m
Ooze	153cm
Croc	1.03m
Blob	493cm
Bugz	6m